



























































Year 4 - Home Learning Grid – Spring 1

Below are 15 home learning tasks for your child to complete during the half term. There are 5 tasks for Maths and English and 5 creative tasks to choose from. Each child is expected to complete six tasks over the term. Two from each curriculum area.

We appreciate that some weekends are busier than others; therefore, we are giving you the flexibility to complete tasks in your own time. Instead of checking weekly we have decided to take homework books in over half term to monitor progress with home learning. Please ensure your child returns their home learning book to school in the last week of term.

English	Maths	Creative																								
<p>We use a lot of homophones in English, can you come with some clever ways to tell them apart.</p> <p>Eg.</p> <div><p>their there they^are</p></div>	<p>You have 2 minutes to find as many items as possible that begin with the letter A. record the score in your book.</p> <p>Repeat again with each letter of the alphabet.</p> <p>How many letters can you complete?</p> <p>Which letter did you find the most objects for?</p> <p>How many items did you find in total?</p>	<p>This is a photograph created by British artist, David Hockney.</p> <div></div> <p>He uses lots of different photos to make one big picture. This is called a montage.</p> <p>Create a photomontage of someone or something that is important to you.</p>																								
<p>Write a poem about Spring.</p> <p>Try and include:</p> <ol style="list-style-type: none">1. Rhythm2. Rhyme3. Repetition4. Onomatopoeia5. Metaphors6. Similes7. Personification	<p>We are looking at length and perimeter in maths this term.</p> <p>Find different rectilinear shaped items around your home and measure the perimeter around them. (Perimeter is the distance around a shape).</p>	<p>In Science this term, we will be learning about electricity.</p> <p>Make a list of all the electrical devices in your home and create a Venn diagram sorting them by how they get their power (battery, mains or both).</p>																								
<p>Write a biography of a character from a book of your choice.</p>	<p>My answer is 96</p> <p>What was my question?</p> <p>Think of as many possibilities as you can.</p>	<p>Explore the landscapes of Africa.</p> <p>You could:</p> <ol style="list-style-type: none">1. Create a piece of artwork2. Research project3. Write a report about them																								
<p>Write a setting description for a place in a book you have read. Try to include:</p> <ol style="list-style-type: none">1. Description of the setting.2. Use your 5 senses.3. Try to use atmosphere, similes, personification and metaphors.	<p>The sum of the symbols of each row the square are given. Can you find the value of each shape?</p> <table><tr><td></td><td></td><td></td><td></td><td>16</td><td> =</td></tr><tr><td></td><td></td><td></td><td></td><td>14</td><td> =</td></tr><tr><td></td><td></td><td></td><td></td><td>16</td><td> =</td></tr><tr><td></td><td></td><td></td><td></td><td>20</td><td></td></tr></table> <p>17 15 17 17</p>					16	 =					14	 =					16	 =					20		<p>Discuss this P4C question with your family.</p> <p>What is a home?</p>
				16	 =																					
				14	 =																					
				16	 =																					
				20																						
<p>We have written ‘What am I?’ riddles at school can you write your own one at home about a subject of your own choice.</p>	<p>Use the Times Table Rock Star app to practise your times tables.</p> <p>Speak to your teacher if you need your login!</p> <p>How many coins can you win?</p>	<p>Take some time to talk to your family about wellbeing.</p> <p>Together come up with a plan to keep calm and happy this term.</p> <p>For example: Set aside time to work on mindfulness together.</p> <p>Think about activities you could do together regularly to help everyone feel positive.</p> <p>Write or take pictures of what you do.</p>																								