

**Hard**

1	2	3	4	5	6	7	8	9	10 - 10
11	12	13	14	15	16	17	18	19	20 - 20
21	22	23	24	25	26	27	28	29	30 - 30
31	32	33	34	35	36	37	38	39	40 - 40
41	42	43	44	45	46	47	48	49	50 - 50
51	52	53	54	55	56	57	58	59	60 - 60
61	62	63	64	65	66	67	68	69	70 - 70
71	72	73	74	75	76	77	78	79	80 - 80
81	82	83	84	85	86	87	88	89	90 - 90
91	92	93	94	95	96	97	98	99	100-100

1. Pick out 10 multiples of 2- ----
2. Pick out 10 multiples of 5 - ----

**Harder**

Find all the factors of these numbers:

1. 6 - 1,2,3,6	6. 20 - 1, 2, 10, 20
2. 12 - 1, 2, 3, 4, 6, 12	7. 24 - 1, 2, 3, 4, 6, 8, 12, 24
3. 8 - 1, 2, 4, 8	8. 40 - 1, 2, 4, 5, 8, 10, 20, 40
4. 9 - 1, 3, 9	9. 28 - 1, 2, 4, 7, 14, 28
5. 15 - 1, 3, 5, 15	10. 30 - 1, 2, 3, 5, 6, 10, 15, 30

**Hardest**

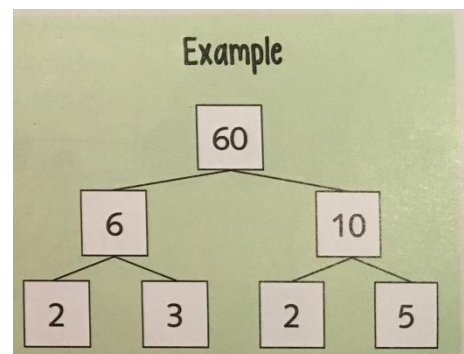
Find all the common factors of both numbers

- |                            |                           |
|----------------------------|---------------------------|
| 1. 3 and 5 - 1             | 6. 16 and 44 1, 2, 4      |
| 2. 8 and 40 - 1,2,4,8      | 7. 34 and 51 - 1,17       |
| 3. 30 and 12 - 1, 2, 3, 6  | 8. 20 and 54 - 1,2        |
| 4. 21 and 42 - 1, 3, 7, 21 | 9. 56 and 80 - 1, 2, 4, 8 |
| 5. 50 and 20 - 1, 2, 5, 10 | 10. 50 and 35 - 1,5       |

**Herculean**

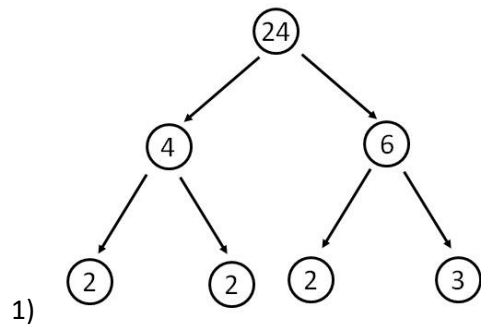
Draw three factor trees for each of these numbers

- 1) 24 -
- 2) 48
- 3) 64
- 4) 81
- 5) 36
- 6) 72

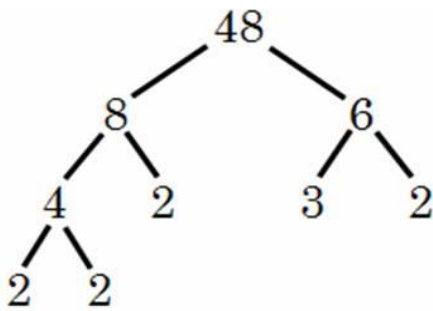


Tuesday Answers

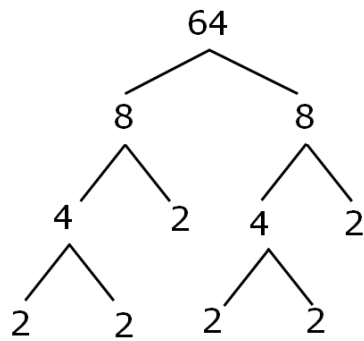
teachoo.com



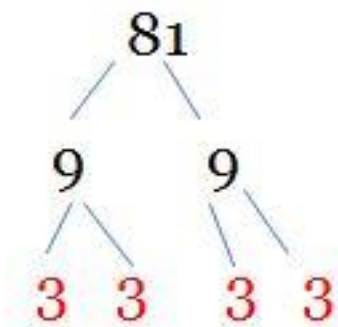
2)



3)

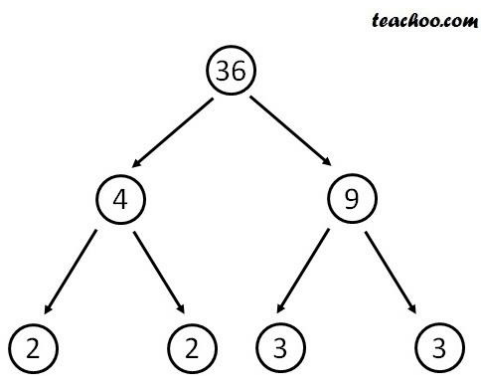


4)



Tuesday Answers

5)



6)

